

Biology
Standard level
Paper 2

9 November 2023

Zone A morning | Zone B morning | Zone C morning

Candidate session number

--	--	--	--	--	--	--	--	--	--

1 hour 15 minutes

Instructions to candidates

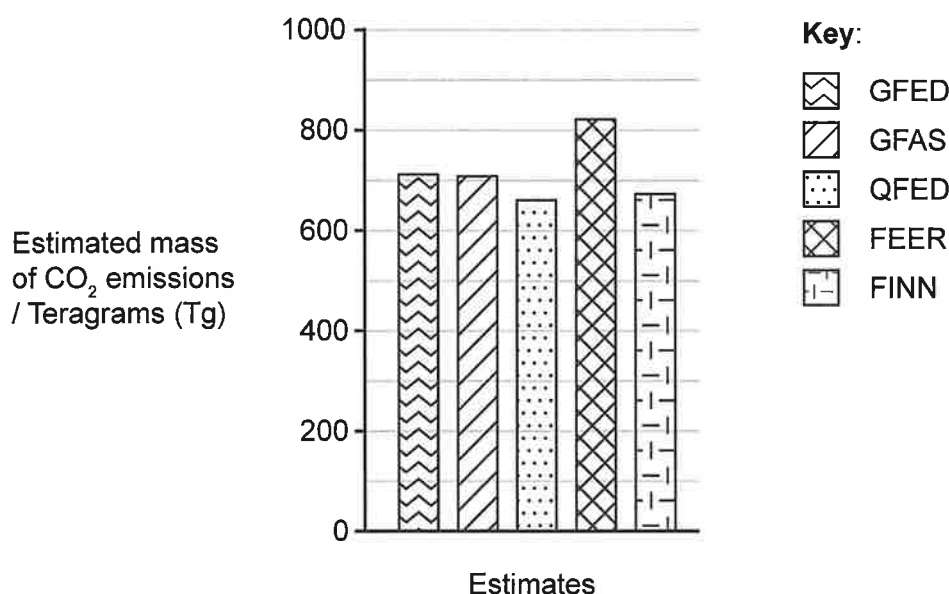
- Write your session number in the boxes above.
- Do not open this examination paper until instructed to do so.
- Section A: answer all questions.
- Section B: answer one question.
- Answers must be written within the answer boxes provided.
- A calculator is required for this paper.
- The maximum mark for this examination paper is **[50 marks]**.



Section A

Answer **all** questions. Answers must be written within the answer boxes provided.

- There were widespread and intense wildfires in Southeast Australia during the summer season from November 2019 to January 2020. Estimates have been made of carbon dioxide emissions from these fires based on satellite monitoring data. The bar chart shows estimates made by five different research programmes: GFED, GFAS, QFED, FEER and FINN.



The table shows other statistics for comparison.

Mean emissions of CO ₂ from wildfires and fossil fuels		CO ₂ / Tg
	Mean annual emissions from wildfires in Australia	410
	Mean annual emissions from combustion of fossil fuels in Australia	402
	Mean Nov to Jan emissions in previous years from wildfires in SE Australia	9
	Mean of the five estimates for Nov 2019 to Jan 2020 emissions from wildfires in SE Australia	715

[Source: adapted from van der Velde, I.R., van der Werf, G.R., Houweling, S. *et al.*, 2021. Vast CO₂ release from Australian fires in 2019–2020 constrained by satellite. *Nature* (597), pp.366–369. <https://doi.org/10.1038/s41586-021-03712-y>]

(This question continues on the following page)



(Question 1 continued)

- (a) The highest estimate of CO₂ emitted from wildfires in Southeast Australia between November 2019 and January 2020 is 820Tg, from the FEER research programme. State the lowest estimate.

[1]

Programme:
Estimate: Tg

- (b) Using the data in the table, comment on the magnitude of the wildfires in Southeast Australia from November 2019 to January 2020.

[3]

.....
.....
.....
.....
.....
.....

(This question continues on page 5)



24EP03

Turn over

Please **do not** write on this page.

Answers written on this page
will not be marked.

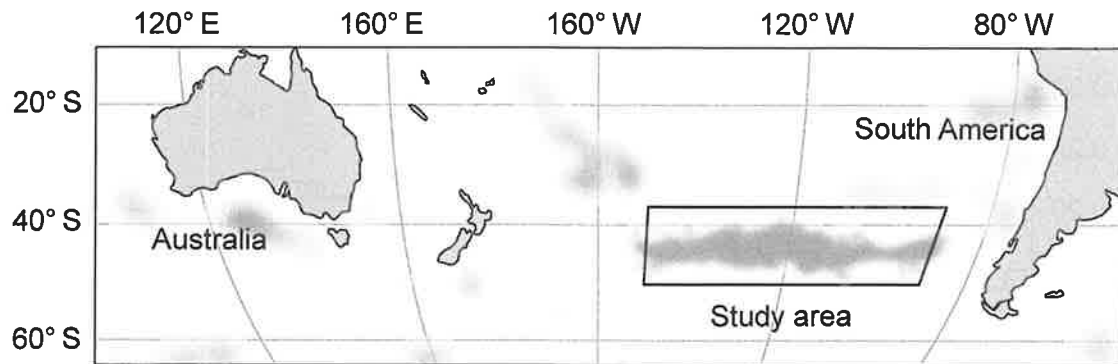


24EP04

(Question 1 continued)

In addition to carbon dioxide, carbon monoxide and other gases, the wildfires emitted smoke. Smoke is an aerosol of solid particles and liquid droplets suspended in air. The complex mixture of chemicals in this aerosol includes black carbon (soot) and compounds of nitrogen, phosphorus and iron. This aerosol absorbs light, allowing its optical density and movement to be assessed by satellite monitoring.

Much of the smoke from the wildfires in Southeast Australia in 2019–2020 was carried eastwards across the South Pacific Ocean. The study area shown in the map was affected by the smoke.



[Source: adapted from Tang, W., Llorc, J., Weis, J. *et al.*, 2021. Widespread phytoplankton blooms triggered by 2019–2020 Australian wildfires. *Nature* (597), pp.370–375. <https://doi.org/10.1038/s41586-021-03805-8>]

(This question continues on the following page)






24EP05

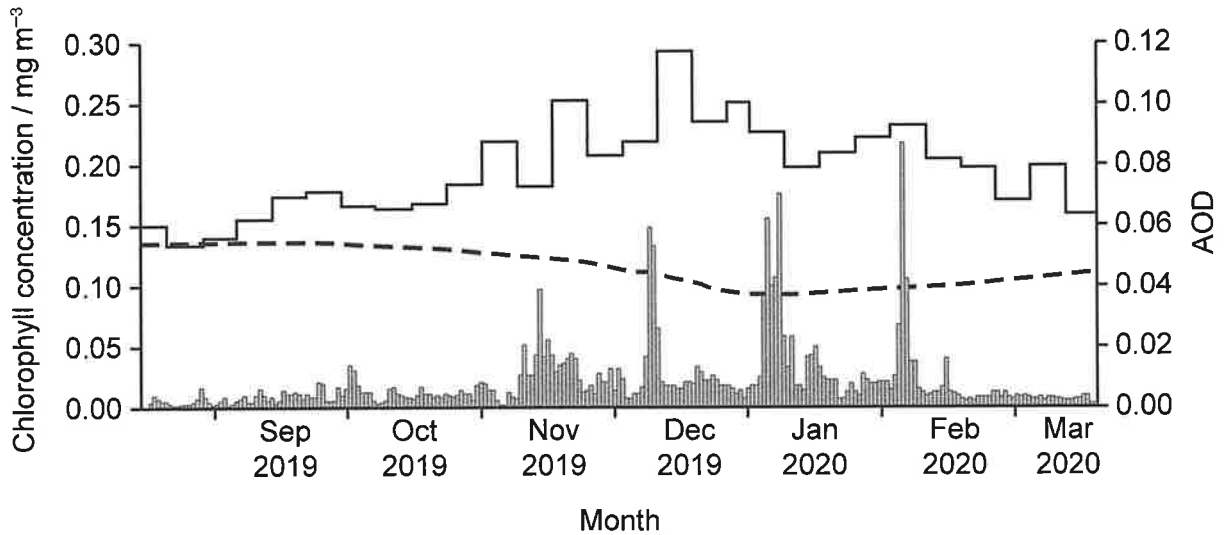
Turn over

(Question 1 continued)

The graph shows the optical density of the air and the chlorophyll concentrations of the water in this study area. The concentration of chlorophyll is proportional to the density of phytoplankton (photosynthetic bacteria and algae) in the water.

Key:

-  Daily measures of aerosol optical density (AOD)
-  8-day mean chlorophyll concentration in 2019–2020
-  8-day mean chlorophyll concentration in previous years



[Source: adapted from Tang, W., Llorc, J., Weis, J. *et al.*, 2021. Widespread phytoplankton blooms triggered by 2019–2020 Australian wildfires. *Nature* (597), pp.370–375. <https://doi.org/10.1038/s41586-021-03805-8>]

(This question continues on the following page)



(Question 1 continued)

- (c) Identify **two** differences between aerosol optical density (AOD) in the months before the wildfires and during the period of wildfires.

[2]

.....

.....

.....

.....

- (d) Using the data in the graph, distinguish between phytoplankton populations in 2019-2020 and in previous years.

[3]

.....

.....

.....

.....

.....

.....

(This question continues on the following page)



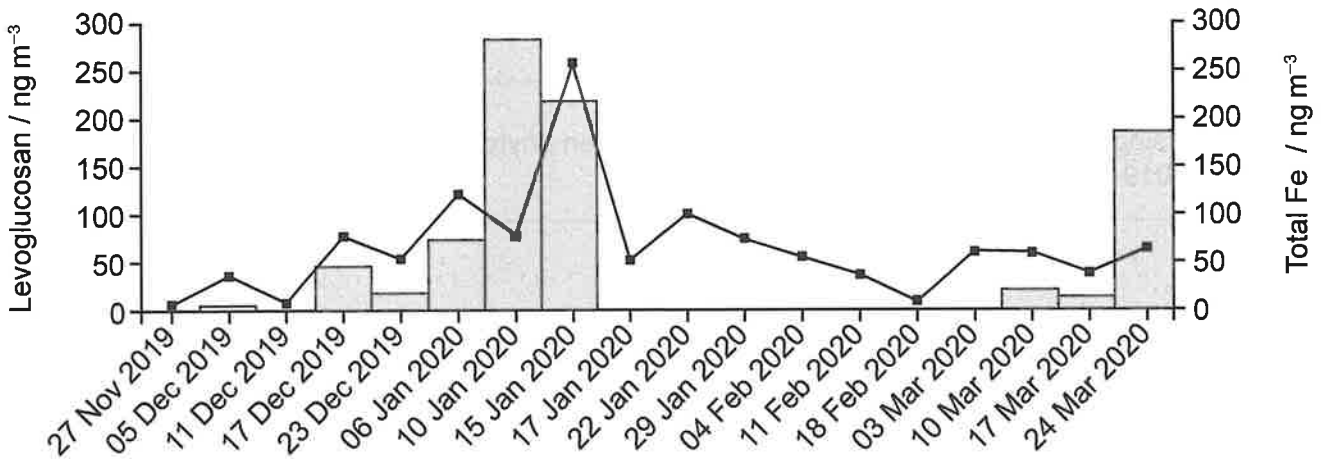
24EP07

Turn over

(Question 1 continued)

Samples of air carrying the aerosol from the wildfires were filtered at Mount Wellington on Tasmania, and the amounts of iron and levoglucosan on the filters were measured. Levoglucosan is produced by combustion of carbohydrates such as starch and cellulose, so is used as a chemical tracer for biomass burning.

Bars on the graph show amounts of levoglucosan, and datapoints show amounts of iron.



[Source: adapted from Tang, W., Llorc, J., Weis, J. *et al.*, 2021. Widespread phytoplankton blooms triggered by 2019–2020 Australian wildfires. *Nature* (597), pp.370–375. <https://doi.org/10.1038/s41586-021-03805-8>]

(e) Explain the conclusions that can be drawn from the data in the graph. [2]

.....

.....

.....

.....

(f) In the South Pacific Ocean, chlorophyll production and growth of phytoplankton are usually limited by a low concentration of iron in the water. Suggest a hypothesis for the cause of the unusual pattern of phytoplankton growth during the summer of 2019–2020. [2]

.....

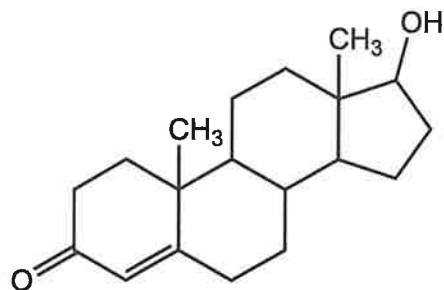
.....

.....

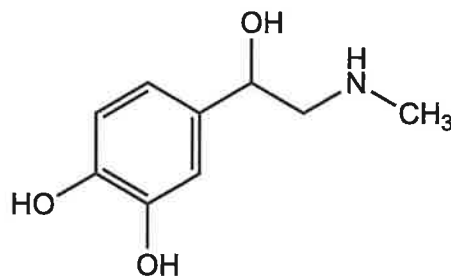
.....



2. Testosterone and epinephrine (adrenaline) are two of the many hormones used for cell-to-cell communication in the human body.



Testosterone



Epinephrine

(a) State **one** effect on the body of each of these hormones. [2]

Testosterone:
Epinephrine:


(b) Hormones are secreted into blood capillaries by gland cells. To reach tissues where a hormone such as testosterone or epinephrine has an effect, it must be pumped twice by the heart. Explain the reasons for this. [2]

.....
.....
.....
.....



3. This redwood tree (*Sequoia sempervirens*) was blown over in 1936, but five side branches formed new roots and are now separate trees.

Three of the new trees
formed from side branches
of the original tree



Dead trunk of original tree

Base of original tree

- (a) State the molecule that trees such as redwoods use as genetic material. [1]

.....
.....

- (b) If the genomes of the five new trees were sequenced, predict with a reason how similar they would be to each other. [2]

.....
.....
.....
.....

(This question continues on the following page)



(Question 3 continued)

(c) Outline **one** method that has been used successfully to clone an adult animal.

[3]

.....

.....

.....

.....

.....

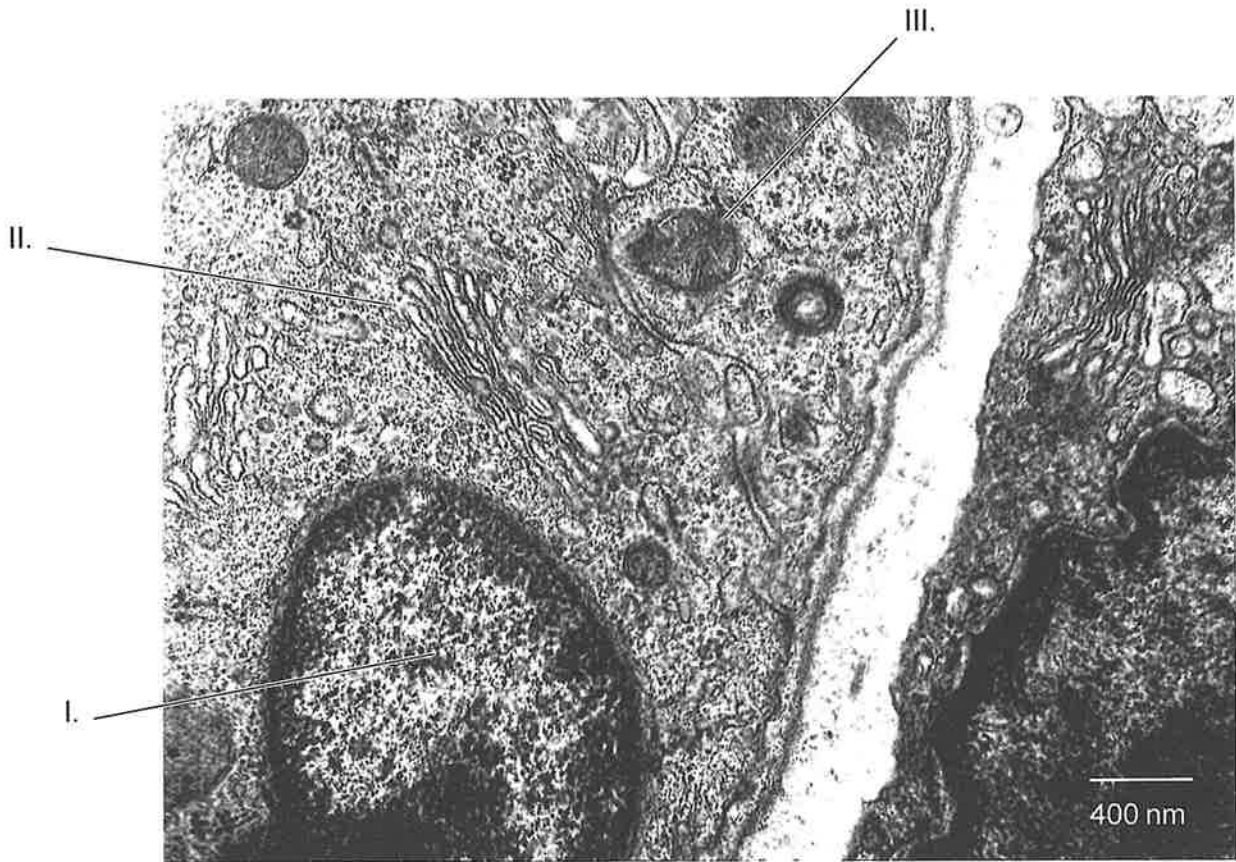
.....



24EP11

Turn over

4. The electron micrograph shows parts of two cells.



(a) Identify organelles I to III.

[3]

I:
II:
III:

(b) Using evidence from the micrograph, deduce whether the cells are prokaryotic or eukaryotic.

[2]

.....
.....
.....
.....

(This question continues on the following page)



(Question 4 continued)

(c) State the function of flagella and ribosomes in prokaryotic cells.

[2]

Flagella:

Ribosomes:



5. Orangutans are closely related to humans.

(a) Outline **two** recognition features that would show that orangutans are mammals. [2]

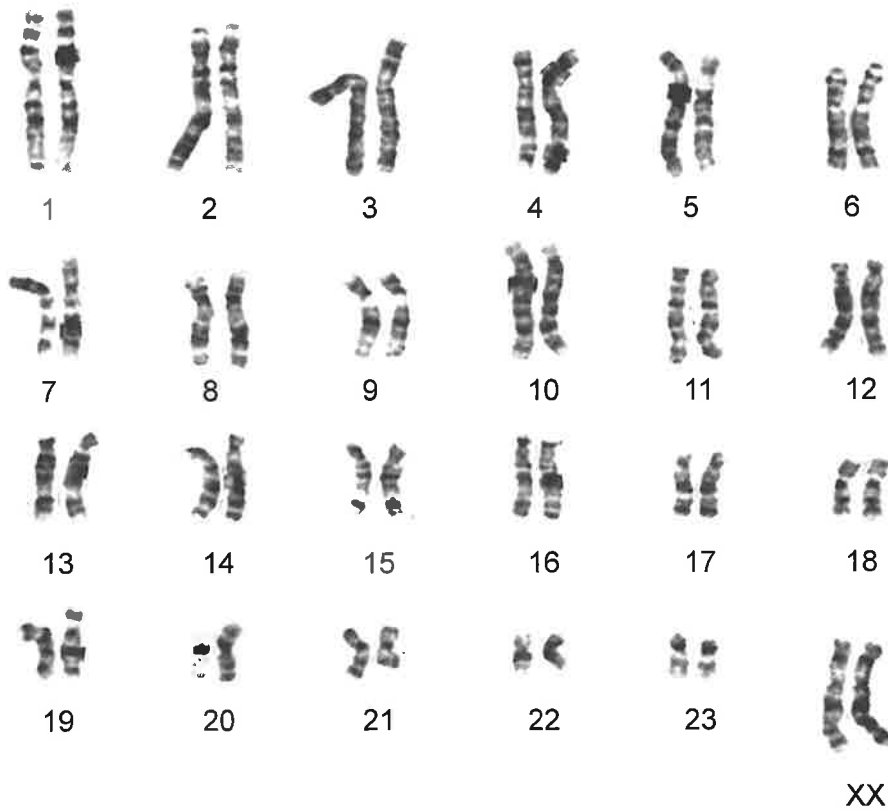
.....

.....

.....

.....

The karyogram shows the chromosomes of an orangutan that did not have any chromosome abnormalities.



(b) Distinguish between the chromosomes of orangutans and the chromosomes of humans. [1]

.....

.....

(This question continues on the following page)



(Question 5 continued)

- (c) Sex is determined in the same way in humans and orangutans. Identify whether the orangutan whose chromosomes are shown in the karyogram was male or female, indicating what the evidence is.

[1]

.....

.....



Section B

Answer **one** question. Up to one additional mark is available for the construction of your answer. Answers must be written within the answer boxes provided.

6. Fats are used by mammals and oils are used by plants for energy storage. Both of these types of lipid are triglycerides.
- (a) Outline how plants make oils using carbon from the atmosphere. [4]
 - (b) Explain the reasons for oils being insoluble and sugars such as glucose being soluble in water. [4]
 - (c) Explain how glucose concentrations in human tissues are regulated to ensure an adequate supply. [7]
7. Living organisms cause change and also respond to change.
- (a) Outline changes to the Earth's atmosphere that have been caused by living organisms. [4]
 - (b) Explain how a population changes by natural selection. [7]
 - (c) Explain how the pressure inside the lungs is changed during ventilation. [4]



A large rectangular area containing horizontal dotted lines for writing.



24EP17

Turn over

[Large empty rectangular area with a dotted grid pattern, intended for handwritten notes or answers.]



[Large empty rectangular area with a dotted grid pattern, intended for handwritten notes or answers.]



24EP20

Blank lined writing area with horizontal ruling lines.



24EP21

Disclaimer:

Content used in IB assessments is taken from authentic, third-party sources. The views expressed within them belong to their individual authors and/or publishers and do not necessarily reflect the views of the IB.

References:

4. Howard, L., 2006. [*Electron micrograph of cells*]. [image online] Available at: <https://commons.wikimedia.org/wiki/> [Accessed 13 September 2022]. SOURCE ADAPTED. REFERENCE REDACTED.
5. Chemnick, L., Zhang, Y. and Ryder, O., n.d. *Determination of orangutan subspecies using genetic techniques*. [PDF online] Available at: <https://www.czs.org/custom.czs/media/CenterAnimalWelfare/Orangutan-Husbandry-Manual/Determination-of-Subspecies-by-Karyotyping.pdf> [Accessed 14 September 2022]. SOURCE ADAPTED.



24EP22

Please **do not** write on this page.

Answers written on this page
will not be marked.



24EP23

Please do not write on this page.

**Answers written on this page
will not be marked.**



24EP24